

► TASK Identify hybrid vehicle power steering system electrical circuits and safety precautions.

MLR
4B22

AST
4B18

MAST
4B19

Time off _____

Time on _____

Total time _____

CDX Tasksheet Number: C551

Vehicle used for this activity:

Year _____ Make _____ Model _____

Odometer _____ VIN _____

1. Research the location and safety precautions for the power steering system the vehicle is equipped with in the appropriate service information.
 - a. List the voltage that the power steering system operates at: _____ V
 - b. List any safety precautions when working on or around the power steering systems and circuits:


2. What color wires are used on the hybrid vehicle power steering system electrical circuits?

3. On the vehicle, locate and point out the power steering electrical circuits and components to your instructor.


4. Have your supervisor/instructor verify satisfactory completion of your answers.

Performance Rating


CDX Tasksheet Number: C551




0




1



2



3



4

Supervisor/instructor signature _____ Date _____