

▶ TASK Describe the function of the power steering pressure switch.

MLR
4B23

AST
4D3

MAST
4D3

Time off _____

Time on _____

Total time _____

CDX Tasksheet Number: C931

Vehicle used for this activity:

Year _____ Make _____ Model _____


Odometer _____ VIN _____

1. Research the function of the power steering pressure switch in the appropriate service information.
 - a. **Describe, in your own words, the function of the power steering pressure switch:**


2. Have your supervisor/instructor verify satisfactory completion of your answers.

Performance Rating


CDX Tasksheet Number: C931




0




1



2



3



4

Supervisor/instructor signature _____ Date _____

